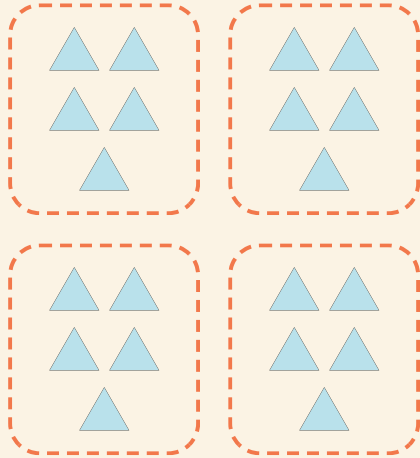


Gruppi facili

Nome: _____ Data: _____

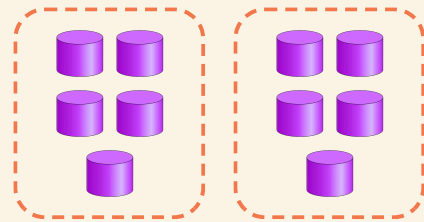
★ Conta i gruppi uguali. Completa la moltiplicazione.

1



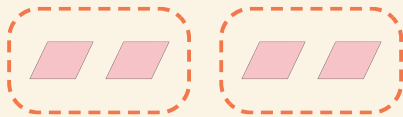
$$4 \times 5 = \square$$

2



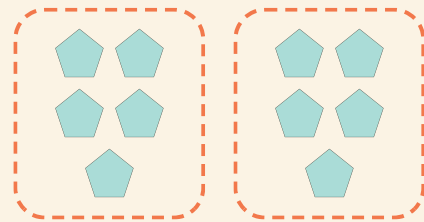
$$2 \times 5 = \square$$

3



$$2 \times 2 = \square$$

4



$$2 \times 5 = \square$$