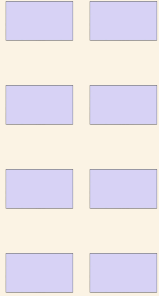


Conta lo schieramento

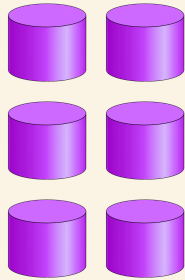
Nome: _____ Data: _____

 Conta le file di immagini. Scrivi quante sono in tutto.


1



2



3



4

