


Quanti gruppi?

Nome: _____ Data: _____

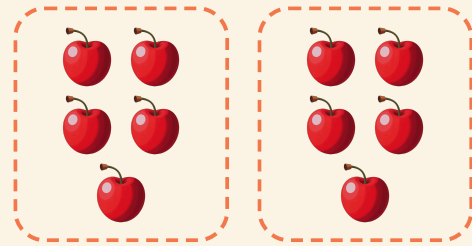
★ I cerchi formano gruppi uguali. Scrivi quanti gruppi ci sono.

1




$$20 \div 5 = \square$$

2




$$10 \div 5 = \square$$

3



$$12 \div 3 = \square$$

4



$$4 \div 2 = \square$$