

Gira al contrario

Nome: _____ Data: _____

★ I due schieramenti hanno lo stesso totale. Completa entrambe le operazioni.


1



$2 \times 5 = \square$

$5 \times 2 = \square$



2



$3 \times 6 = \square$

$6 \times 3 = \square$

3



$4 \times 5 = \square$

$5 \times 4 = \square$

4



$4 \times 3 = \square$

$3 \times 4 = \square$