

Matematica col domino

Nome: _____ Data: _____


★ Conta i due lati del domino. Scrivi la somma.

1



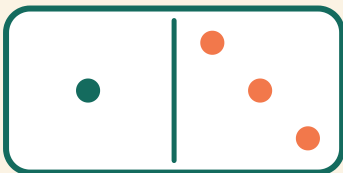
$$6 + 6 = \square$$

2




$$4 + 3 = \square$$

3



$$1 + 3 = \square$$

4



$$2 + 6 = \square$$