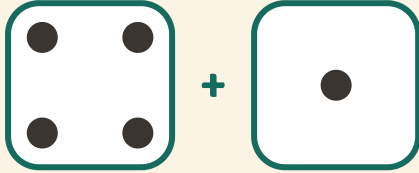


Lancia e addiziona

Nome: _____ Data: _____

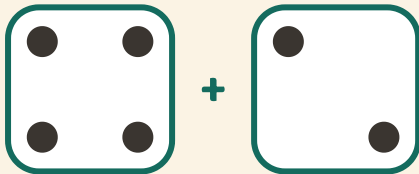
★ Conta i puntini sui due dadi. Scrivi la somma.

1



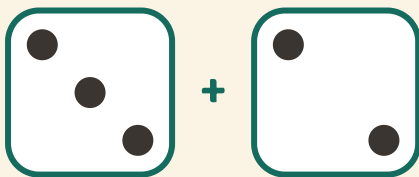
$$4 + 1 = \square$$

2



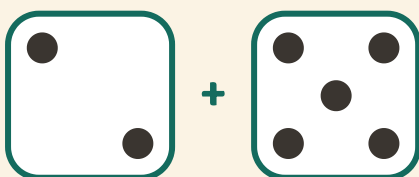
$$4 + 2 = \square$$

3



$$3 + 2 = \square$$

4



$$2 + 5 = \square$$