



Dividi tutto

Nome: _____ Data: _____


★ Dividi il mucchio in parti uguali nei contenitori. Scrivi quanti ne tocca a ognuno.

1




$$15 \div 3 = \square$$

2




$$9 \div 3 = \square$$

3



$$20 \div 4 = \square$$

4



$$16 \div 4 = \square$$