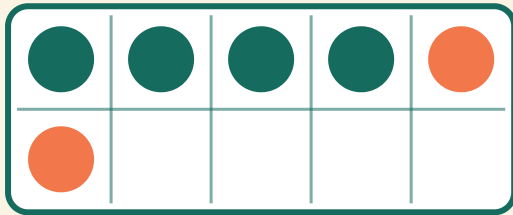


# Addizione sulla griglia

Nome: \_\_\_\_\_ Data: \_\_\_\_\_


★ Conta i due colori. Scrivi il risultato dell'addizione.

1



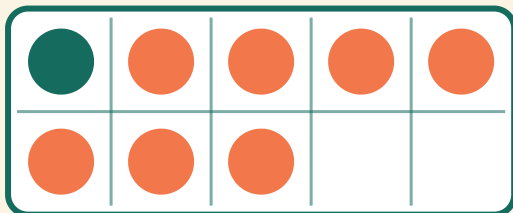
$$4 + 2 = \square$$

2



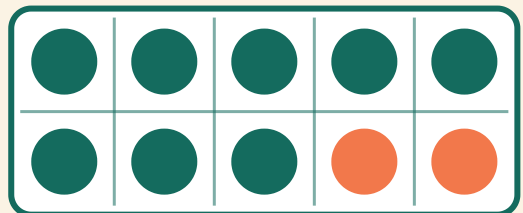
$$8 + 1 = \square$$

3



$$1 + 7 = \square$$

4



$$8 + 2 = \square$$