


Fai 10!

Nome: _____ Data: _____



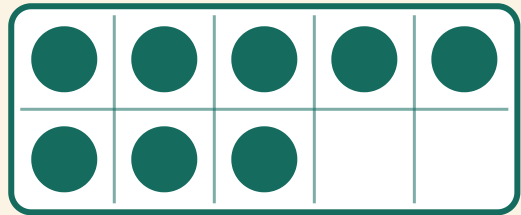
Quanti puntini in più per fare 10? Scrivi il numero mancante.

1



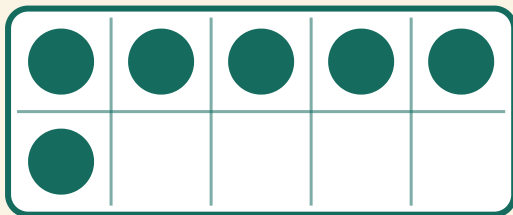
$$10 + \boxed{} = 10$$

2



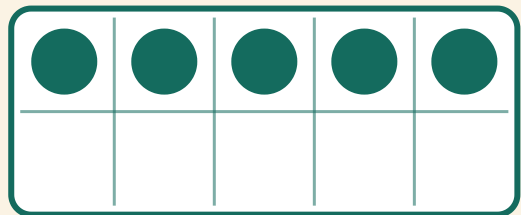
$$8 + \boxed{} = 10$$

3



$$6 + \boxed{} = 10$$

4



$$5 + \boxed{} = 10$$