


Vind de breuk

Naam: _____ Datum: _____

★ Omcirkel de vorm die de breuk toont.


1

$$\frac{2}{4}$$




2

$$\frac{1}{2}$$



3

$$\frac{2}{3}$$



4

$$\frac{1}{3}$$

