

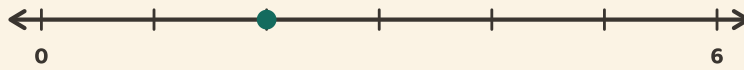
Breuken op de lijn

Naam: _____ Datum: _____

★ De stip wijst een breuk aan. Omcirkel welke.

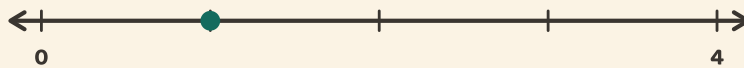
1

0 → 1 in 6 steps



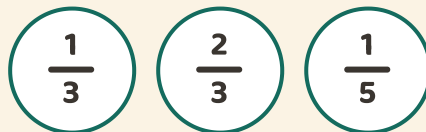
2

0 → 1 in 4 steps



3

0 → 1 in 3 steps



4

0 → 1 in 4 steps

