


# Hoeveel tientallen?

Naam: \_\_\_\_\_ Datum: \_\_\_\_\_


★ Tel de tienstaven. Maak de som af.

1



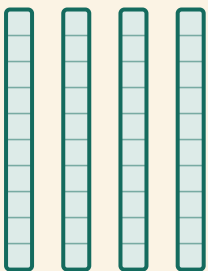
$$\square \times 10 = \square$$

2




$$\square \times 10 = \square$$

3



$$\square \times 10 = \square$$

4



$$\square \times 10 = \square$$