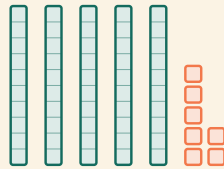


Rek het getal uit

Naam: _____ Datum: _____

★ Kijk naar de blokken. Omcirkel de bijbehorende splitsvorm.

1

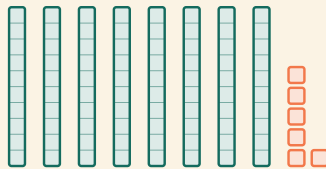


$50 + 8$

$50 + 7$

$70 + 5$

2

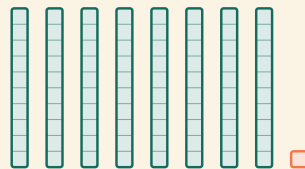


$80 + 7$

$80 + 6$

$60 + 8$

3

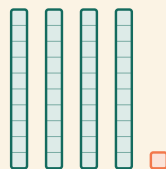


$80 + 2$

$80 + 1$

$10 + 8$

4



$40 + 1$

$40 + 2$

$10 + 4$