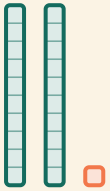


Blokken weghalen

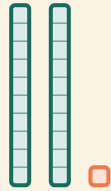
Naam: _____ Datum: _____

★ Trek de tweede groep van de eerste af. Schrijf het antwoord op.

1



-



=



2



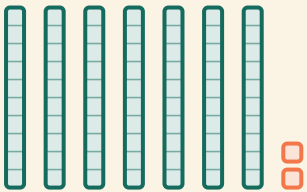
-



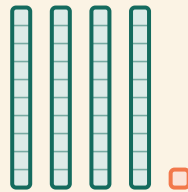
=



3



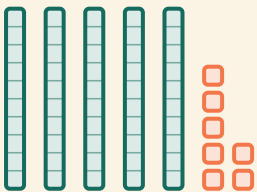
-




=



4



-



=

