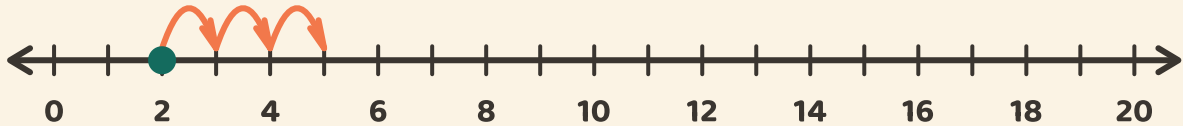


# Springen langs de lijn

Naam: \_\_\_\_\_ Datum: \_\_\_\_\_

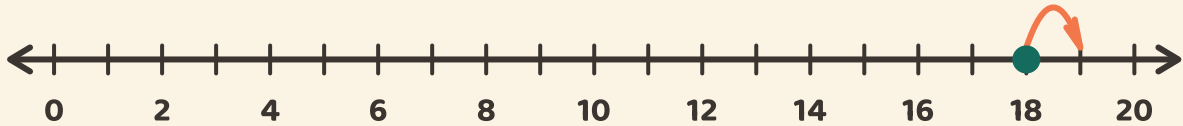
★ Begin bij de stip. Tel de sprongen. Schrijf het antwoord van de optelsom op.

1



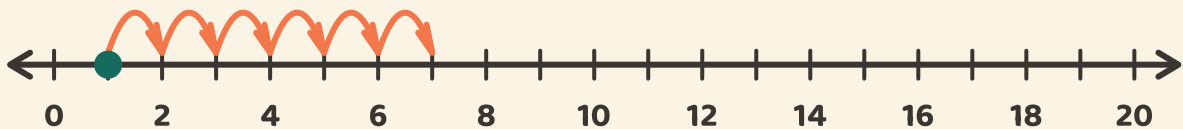
$$2 + 3 = \boxed{\phantom{00}}$$

2



$$18 + 1 = \boxed{\phantom{00}}$$

3



$$1 + 6 = \boxed{\phantom{00}}$$