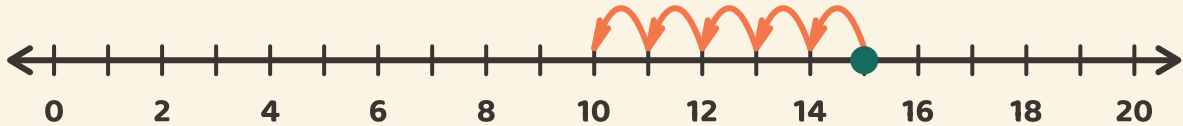


# Spring terug en trek af

Naam: \_\_\_\_\_ Datum: \_\_\_\_\_

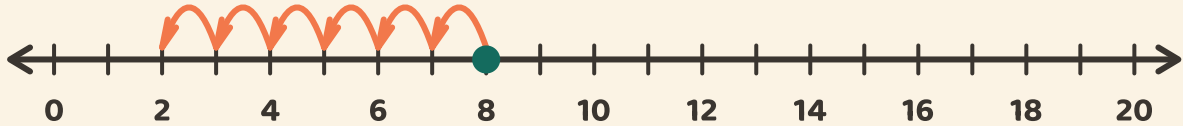
★ Volg de sprongen achteruit. Schrijf het antwoord van de aftreksom op.

1



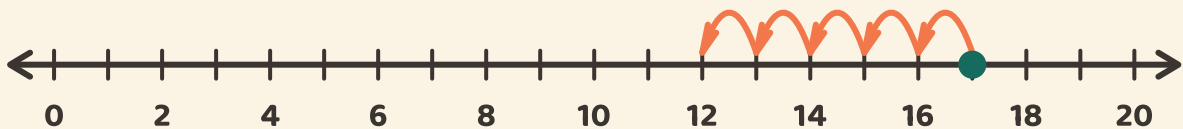
$$15 - 5 = \boxed{\phantom{00}}$$

2



$$8 - 6 = \boxed{\phantom{00}}$$

3



$$17 - 5 = \boxed{\phantom{00}}$$