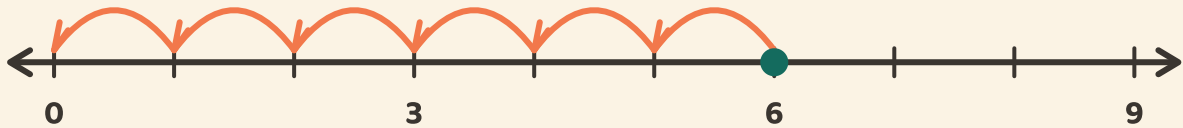


Spring terug naar nul

Naam: _____ Datum: _____

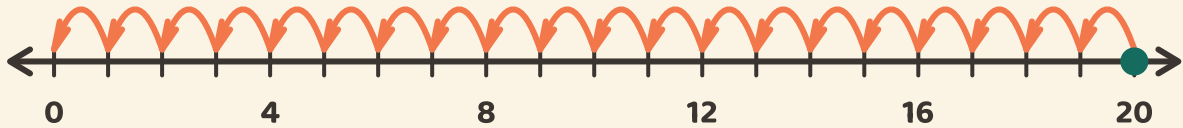
★ Tel de gelijke sprongen terug naar nul. Schrijf op hoeveel sprongen het kost.

1



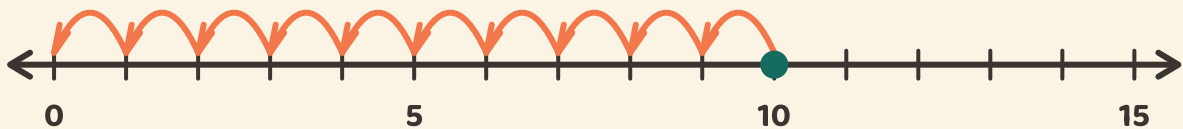
$$6 \div 3 = \square$$

2



$$20 \div 4 = \square$$

3



$$10 \div 5 = \square$$