



Welke heeft minder?

Naam: _____ Datum: _____




Kijk naar beide groepen. Omcirkel de groep met MINDER.

1



2



3

