


# Tel nog eens op

Naam: \_\_\_\_\_ Datum: \_\_\_\_\_


★ Elke ring heeft evenveel. Maak de optelsom af.

1



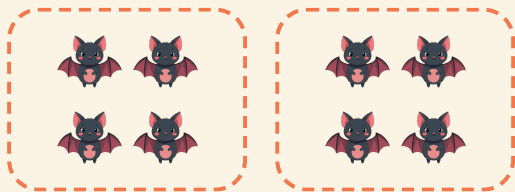
$$4 + 4 = \square$$

2




$$2 + 2 + 2 + 2 = \square$$

3



$$4 + 4 = \square$$

4



$$3 + 3 = \square$$