

# Van optellen naar keer

Naam: \_\_\_\_\_ Datum: \_\_\_\_\_


★ Tel de gelijke groepen. Maak de keersom af.

1




$$2 \times 2 = \square$$

2




$$3 \times 3 = \square$$

3



$$4 \times 2 = \square$$

4



$$2 \times 2 = \square$$