


Hoeveel groepen?

Naam: _____ Datum: _____

★ De ringen maken gelijke groepen. Schrijf op hoeveel groepen er zijn.

1




$$12 \div 4 = \square$$

2




$$4 \div 2 = \square$$

3



$$8 \div 4 = \square$$

4



$$12 \div 4 = \square$$