


Van optellen naar keer

Naam: _____ Datum: _____


★ Tel de gelijke groepen. Maak de keersom af.

1




$$3 \times 4 = \square$$

2




$$4 \times 3 = \square$$

3



$$3 \times 2 = \square$$

4



$$3 \times 2 = \square$$