


Hoeveel groepen?

Naam: _____ Datum: _____

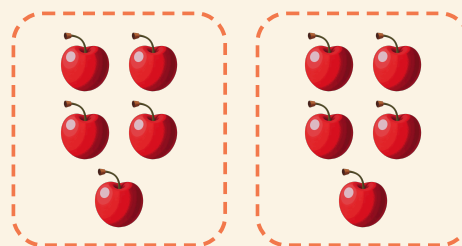
★ De ringen maken gelijke groepen. Schrijf op hoeveel groepen er zijn.

1




$$20 \div 5 = \square$$

2




$$10 \div 5 = \square$$

3



$$12 \div 3 = \square$$

4



$$4 \div 2 = \square$$