

Dominorekenen

Naam: _____ Datum: _____


★ Tel beide kanten van de domino. Schrijf de som op.

1



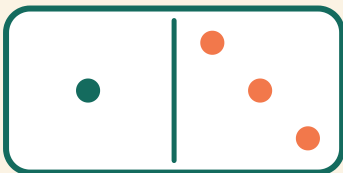
$$6 + 6 = \square$$

2




$$4 + 3 = \square$$

3



$$1 + 3 = \square$$

4



$$2 + 6 = \square$$