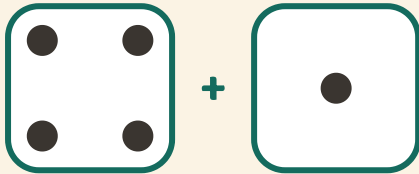


Gooien en optellen

Naam: _____ Datum: _____

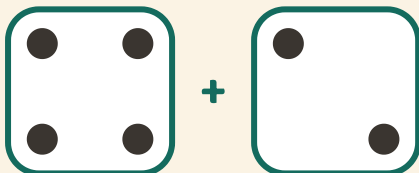
★ Tel de stippen op beide dobbelstenen. Schrijf de som op.

1



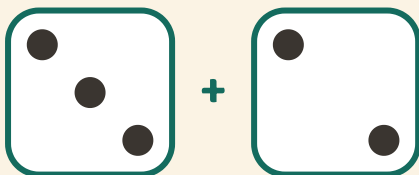
$$4 + 1 = \square$$

2



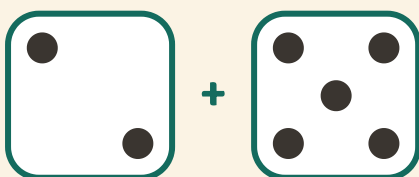
$$4 + 2 = \square$$

3



$$3 + 2 = \square$$

4



$$2 + 5 = \square$$