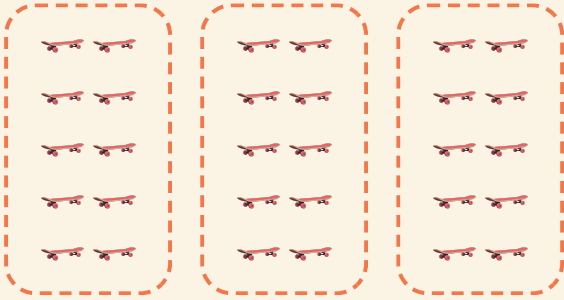


# Makkelijke groepen

Naam: \_\_\_\_\_ Datum: \_\_\_\_\_


★ Tel de gelijke groepen. Maak de keersom af.

1



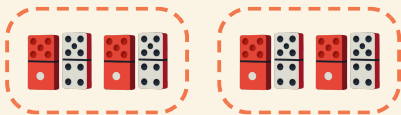
$$3 \times 10 = \square$$

2




$$4 \times 2 = \square$$

3



$$2 \times 2 = \square$$

4



$$2 \times 10 = \square$$