


# Kies het rooster

Naam: \_\_\_\_\_ Datum: \_\_\_\_\_

★ Omcirkel het rooster dat bij de keersom past.


1

$4 \times 5$



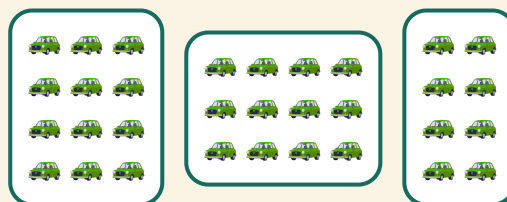
2

$3 \times 2$



3

$4 \times 3$



4

$3 \times 5$

