



Verdeel het

Naam: _____ Datum: _____


★ Verdeel de stapel eerlijk over de bakken. Schrijf op hoeveel elk krijgt.

1




$$15 \div 3 = \square$$

2




$$9 \div 3 = \square$$

3



$$20 \div 4 = \square$$

4



$$16 \div 4 = \square$$