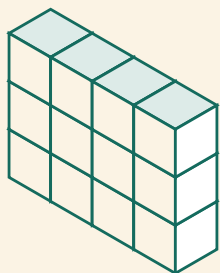


Blokkentorens

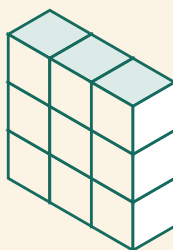
Naam: _____ Datum: _____

★ Tel alle blokken in elke toren. Schrijf het totaal op.

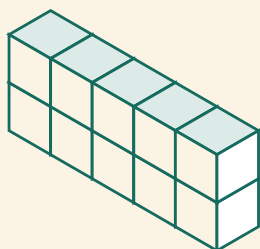
1



2



3



4

