
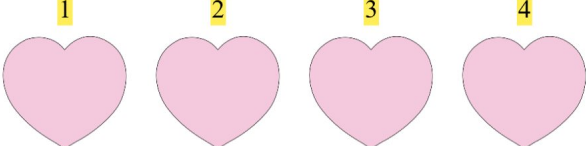



Optellen is Leuk

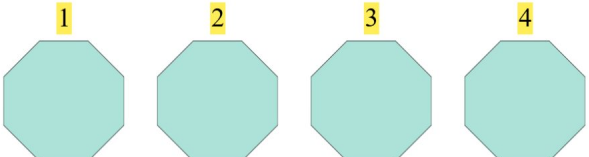

Tel de afbeeldingen, tel het getal erbij op en schrijf je antwoord!

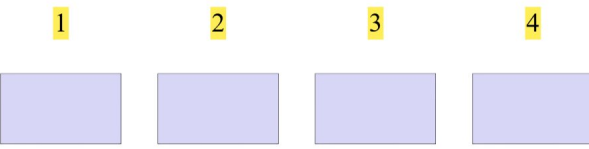

1.  $+$  $1 + 1 = 2$

2.  $+$  $5 + 3 = 8$

3.  $+$  $4 + 3 = 7$

4.  $+$  $2 + 4 = 6$

5.  $+$  $4 + 2 = 6$

6.  $+$  $4 + 1 = 5$