

Schattenjacht

Volg de aanwijzingen en vind de schat!


























Begin bij A3.

Ga naar het oosten 1 vak.

Ga naar het zuiden 3 vakken.

Ga naar het noorden 2 vakken.

Ga naar het westen 1 vak Waar is de schat?

| | 1 | 2 | 3 | 4 | 5 |
|---|---|---|---|--|---|
| A |  |  |  |  |  |
| B |  |  |  |  |  |
| C |  |  |  |  |  |
| D |  |  |  |  |  |
| E |  |  |  |  |  |