


Maak er 10 van

Naam: _____ Datum: _____

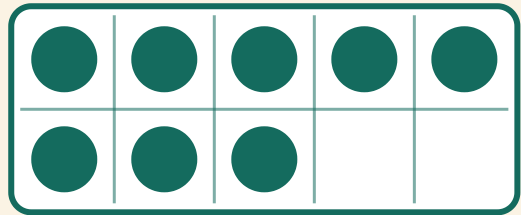
★ Hoeveel stippen erbij om 10 te maken? Schrijf het ontbrekende getal op.

1



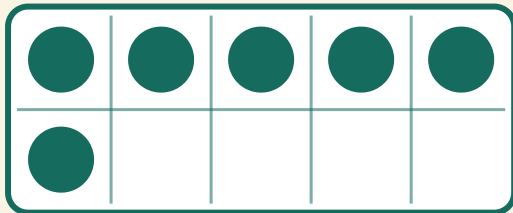
$$10 + \boxed{} = 10$$

2



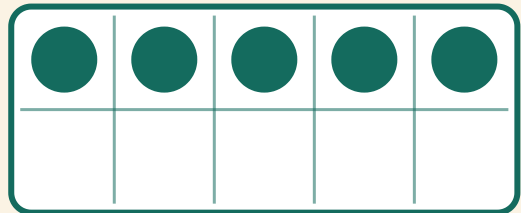
$$8 + \boxed{} = 10$$

3



$$6 + \boxed{} = 10$$

4



$$5 + \boxed{} = 10$$