





Gøy Addisjon



Legg sammen tallene og skriv svarene dine!



1.  $+$  $1 + 4 = 5$

2.  $+$  $4 + 4 = 8$

3.  $+$  $4 + 2 = 6$

4.  $+$  $4 + 1 = 5$

5.  $+$  $5 + 4 = 9$

6.  $+$  $2 + 4 = 6$