

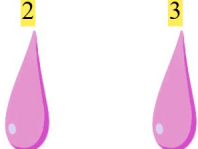
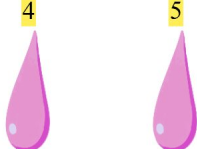
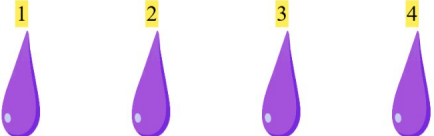



# Gøy Addisjon

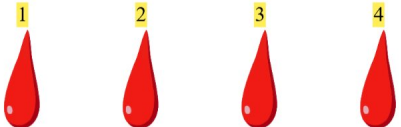


Legg sammen tallene og skriv svarene dine!




1.      $1 + 4 = 5$

2.     $4 + 2 = 6$

3.     $5 + 3 = 8$

4.     $4 + 1 = 5$

5.     $4 + 3 = 7$

6.     $3 + 2 = 5$