



# Gøy Addisjon

Legg sammen tallene og skriv svarene dine!



1.  +   $4 + 4 = 8$

2.  +   $3 + 5 = 8$

3.  +   $2 + 3 = 5$

4.  +   $5 + 5 = 10$

5.  +   $2 + 2 = 4$

6.  +   $5 + 2 = 7$