

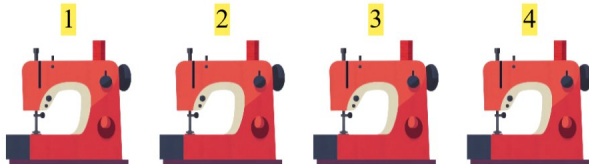


Gøy Addisjon

Tell bildene, legg til tallet og skriv svaret ditt!

1.  + 5 $5 + 5 = 10$

2.  + 5 $3 + 5 = 8$

3.  + 4 $4 + 4 = 8$

4.  + 4 $3 + 4 = 7$

5.  + 2 $4 + 2 = 6$

6.  + 5 $2 + 5 = 7$