







Gøy Addisjon



Tell bildene, legg til tallet og skriv svaret ditt!

1.   **5** $2 + 5 = 7$

2.   **2** $3 + 2 = 5$

3.   **1** $4 + 1 = 5$

4.   **3** $5 + 3 = 8$

5.   **3** $3 + 3 = 6$

6.   **5** $3 + 5 = 8$