




Gøy Addisjon

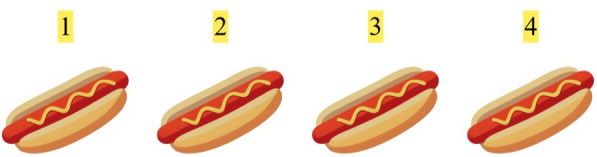
Tell bildene, legg til tallet og skriv svaret ditt!

1.  + 3 $3 + 3 = 6$

2.  + 1 $2 + 1 = 3$

3.  + 3 $4 + 3 = 7$

4.  + 3 $5 + 3 = 8$

5.  + 5 $4 + 5 = 9$

6.  + 4 $5 + 4 = 9$