



# Gøy Addisjon

Tell bildene, legg til tallet og skriv svaret ditt!


1.  + 1  $4 + 1 = 5$

2.  + 2  $1 + 2 = 3$

3.  + 2  $3 + 2 = 5$

4.  + 5  $2 + 5 = 7$

5.  + 4  $3 + 4 = 7$

6.  + 2  $2 + 2 = 4$