




Gøy Addisjon

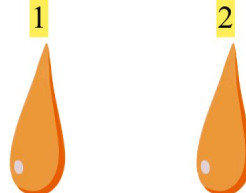

Tell bildene, legg til tallet og skriv svaret ditt!

1.   **3** $2 + 3 = 5$

2.   **4** $3 + 4 = 7$

3.   **2** $1 + 2 = 3$

4.   **1** $3 + 1 = 4$

5.   **2** $2 + 2 = 4$

6.   **5** $3 + 5 = 8$