

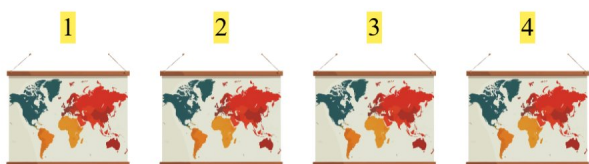


Gøy Addisjon

Tell bildene, legg til tallet og skriv svaret ditt!

1.  + 5 5 + 5 = 10

2.  + 5 4 + 5 = 9

3.  + 2 4 + 2 = 6

4.  + 2 5 + 2 = 7

5.  + 4 4 + 4 = 8

6.  + 5 1 + 5 = 6