



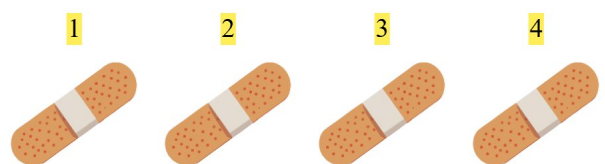
Gøy Addisjon

Tell bildene, legg til tallet og skriv svaret ditt!

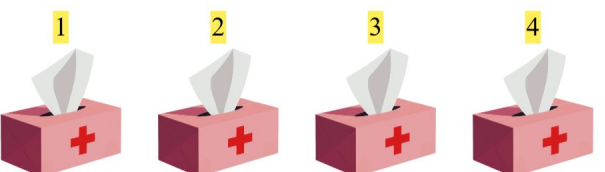
1.  + 2 $2 + 2 = 4$

2.  + 1 $1 + 1 = 2$

3.  + 2 $5 + 2 = 7$

4.  + 4 $4 + 4 = 8$

5.  + 1 $5 + 1 = 6$

6.  + 1 $4 + 1 = 5$