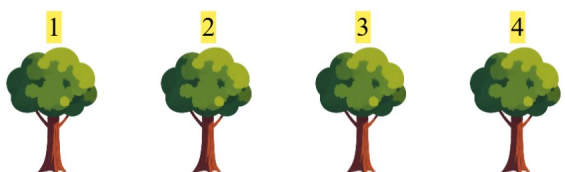







Gøy Addisjon



Tell bildene, legg til tallet og skriv svaret ditt!

1.   **4** $2 + 4 = 6$

2.   **5** $4 + 5 = 9$

3.   **4** $4 + 4 = 8$

4.   **1** $2 + 1 = 3$

5.   **1** $3 + 1 = 4$

6.   **3** $1 + 3 = 4$