




# Gøy Addisjon

Tell bildene, legg til tallet og skriv svaret ditt!

1.   $+$  **1**  $1 + 1 = 2$

2.   $+$  **3**  $4 + 3 = 7$

3.   $+$  **2**  $2 + 2 = 4$

4.   $+$  **5**  $3 + 5 = 8$

5.   $+$  **3**  $2 + 3 = 5$

6.   $+$  **2**  $4 + 2 = 6$