


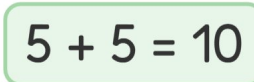


Gøy Addisjon



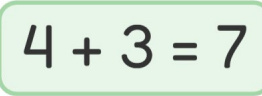
Tell bildene, legg til tallet og skriv svaret ditt!

1.   **5**  $2 + 5 = 7$

2.   **5**  $5 + 5 = 10$

3.   **2**  $2 + 2 = 4$

4.   **4**  $1 + 4 = 5$

5.   **3**  $4 + 3 = 7$

6.   **5**  $1 + 5 = 6$