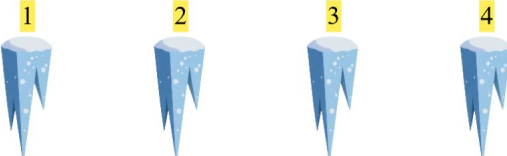



Gøy Addisjon

Tell bildene, legg til tallet og skriv svaret ditt!


1.  + 4 $3 + 4 = 7$

2.  + 2 $4 + 2 = 6$

3.  + 1 $4 + 1 = 5$

4.  + 5 $5 + 5 = 10$

5.  + 3 $5 + 3 = 8$

6.  + 2 $2 + 2 = 4$