



# Gøy Addisjon


Finn det manglende tallet for å fullføre addisjonen!



1.  <sup>1</sup> + 4 = 5 1 + 4 = 5

2.  <sup>1</sup>  <sup>2</sup> + 5 = 7 2 + 5 = 7

3.  <sup>1</sup> + 2 = 3 1 + 2 = 3

4.  <sup>1</sup>  <sup>2</sup>  <sup>3</sup> + 5 = 8 3 + 5 = 8

5.  <sup>1</sup> + 3 = 4 1 + 3 = 4

6.  <sup>1</sup>  <sup>2</sup> + 2 = 4 2 + 2 = 4