




# Gøy Addisjon


Finn det manglende tallet for å fullføre addisjonen!


1.  + **2** = **3**       $1 + 2 = 3$

2.  + **2** = **7**       $5 + 2 = 7$

3.  + **2** = **6**       $4 + 2 = 6$

4.  + **4** = **6**       $2 + 4 = 6$

5.  + **3** = **4**       $1 + 3 = 4$

6.  + **2** = **4**       $2 + 2 = 4$