




Gøy Addisjon

Finn det manglende tallet for å fullføre addisjonen!


1.  ¹ + 4 = 5 1 + 4 = 5

2.  ¹ ² ³ ⁴ + 2 = 6 4 + 2 = 6

3.  ¹ ² + 5 = 7 2 + 5 = 7

4.  ¹ ² ³ ⁴ + 5 = 9 4 + 5 = 9

5.  ¹ ² ³ + 1 = 4 3 + 1 = 4

6.  ¹ ² + 2 = 4 2 + 2 = 4