



Gøy Addisjon

Finn det manglende tallet for å fullføre addisjonen!


1.  + 5 = 7 2 + 5 = 7

2.  + 5 = 6 1 + 5 = 6

3.  + 5 = 10 5 + 5 = 10

4.  + 3 = 4 1 + 3 = 4

5.  + 4 = 8 4 + 4 = 8

6.  + 2 = 4 2 + 2 = 4